


Compare Money

1. Match the money below to its equal amount.



VF
HW/Ext

2. Tick the money below to make the comparison statement true.



VF
HW/Ext

3. Sam and Megan both want to buy a new teddy bear.



Sam



Megan



Who has enough money to buy the teddy bear? Explain your answer.



RPS
HW/Ext

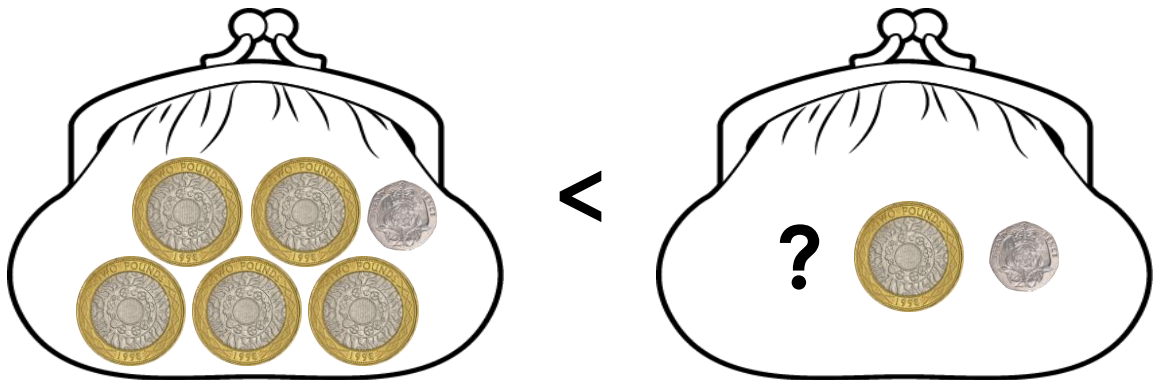
Compare Money

4. Match the money below to its equal amount.



VF
HW/Ext

5. Tick the money below to make the comparison statement true.



VF
HW/Ext

6. Jack and Rosie both want to buy a new pencil case.



Who has enough money to buy the pencil case? Explain your answer.



RPS
HW/Ext

Compare Money

7. Match the money below to the correct statement.



1. Less than £5.00



2. More than £10.00

3. Equal to 50p



VF
HW/Ext

8. Draw the coins or notes below that could make this comparison statement true.




VF
HW/Ext

9. Izzy and Seb both want to buy a new robot.



Izzy



Seb



Who has enough money to buy the robot? Explain your answer.



RPS
HW/Ext